

GR3 Q4 Pre Test Benchmark Teacher Copy

Indicate the answer choice that best completes the statement or answers the question.

1. Which figure has only 1 right angle? 3.G.1

a.



b.



c.



d.



Read each question. Select the correct answer.

2. Tori wants to check the division problem below. 3.OA.7

$$14 \div 7 = 2$$

Which number sentence below can she use?

a. $2 \times 7 = 14$

b. $14 \div 2 = 7$

c. $7 + 7 = 14$

d. $14 - 7 = 7$

GR3 Q4 Pre Test Benchmark Teacher Copy

3. Irene bought 5 tickets to a water park. She paid \$45 in all for the tickets. Which equation can be used to find the cost of one ticket? The letter t stands for the unknown. 3.OA.8

a. $t - 5 = 45$

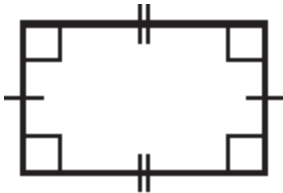
b. $t \div 5 = 45$

c. $5 \times t = 45$

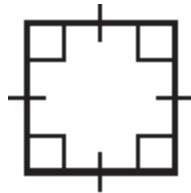
d. $5 + t = 45$

4. Which quadrilateral is a square? 3.G.1

a.




b.



c.



d.



GR3 Q4 Pre Test Benchmark Teacher Copy

Find each missing factor.

5. $9 \times (\square \times 2) = 72$ 3.OA.7

- a. 4 b. 3
c. 2 d. 1

Solve.

6. Sam bought 3 packs of tennis balls. Each pack has 3 tennis balls. He paid \$3 for each tennis ball. How much did all the tennis balls cost? 3.OA.8

Indicate the answer choice that best completes the statement or answers the question.

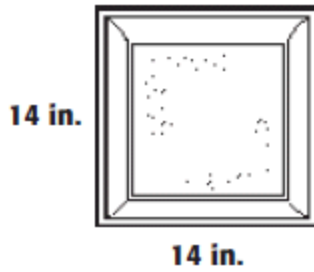
7. Tyrone saw the sign below on the way to school. Which quadrilateral did he see? 3.G.1



- a. trapezoid b. rhombus
c. square d. rectangle

GR3 Q4 Pre Test Benchmark Teacher Copy

8. Which statement describes the following figure? 3.G.1



- a. 4 sides, 4 right angles, square
- b. 4 sides, 5 angles, pentagon
- c. 4 sides, 3 angles, triangle
- d. 4 sides, 4 right angles, trapezoid

ANSWER KEY

- 1. D
- 2. A
- 3. C
- 4. B
- 5. A
- 6. \$27.00
- 7. D
- 8. A