

GR1 Q3 Pre Test Benchmark Teacher Copy

Select the correct answer.

___ 1. Which number is ten more? 1.NBT.5

73, _____

- a. 53 b. 60
- c. 83 d. 69

Write the correct answer.

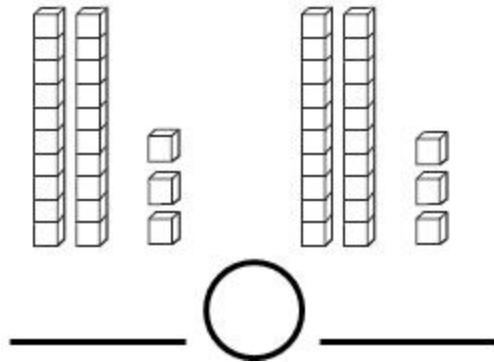
2. Count by fives. Write the the numbers. How much in all? 1.NBT.1



_____ ¢ _____ ¢ _____ ¢
 in all




GR1 Q3 Pre Test Benchmark Teacher Copy


___ 3. Count each set of cubes. Select *is greater than*, *is less than*, or *is equal to*.
1.NBT.3



- a. is greater than
- b. is less than
- c. is equal to



Read each question. Select the correct answer.

Favorite Pets		
Pet	Tally	Total
 Cat		
 Dog		
 Bird		

___ 4. How many students chose  ? 1.MD.4

- a. 3 b. 4
- c. 5 d. 6

GR1 Q3 Pre Test Benchmark Teacher Copy

___ 5. How many fewer students chose  than  ? 1.MD.4

- a. 1 b. 2
- c. 3 d. 4

___ 6. How many students were surveyed? 1.MD.4

- a. 10 b. 11
- c. 12 d. 13

GR1 Q3 Pre Test Benchmark Teacher Copy

Answer Key

1. c



5

¢



10

¢



15

¢

in all

2.

3. c

4. a

5. a

6. a